

# Scalars & Vectors

Fairlight Tuition

## Five 4

[Mechanics]

Name: .....

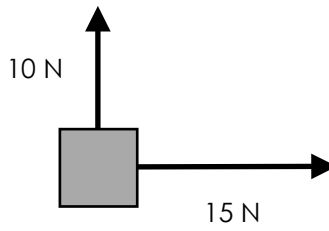
Date: .....

[www.FairlightTuition.org](http://www.FairlightTuition.org)

# Easy

1. Find the magnitude of the resultant force on the body:

Diagram not drawn to scale



.....

.....

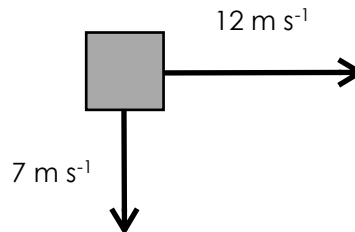
.....

.....

.....

2. Find the direction of the resultant velocity of the body:

Diagram not drawn to scale



.....

.....

.....

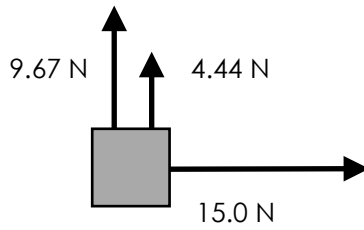
.....

.....

Moderate

3. Find the resultant force on the body:

Diagram not drawn to scale



.....

.....

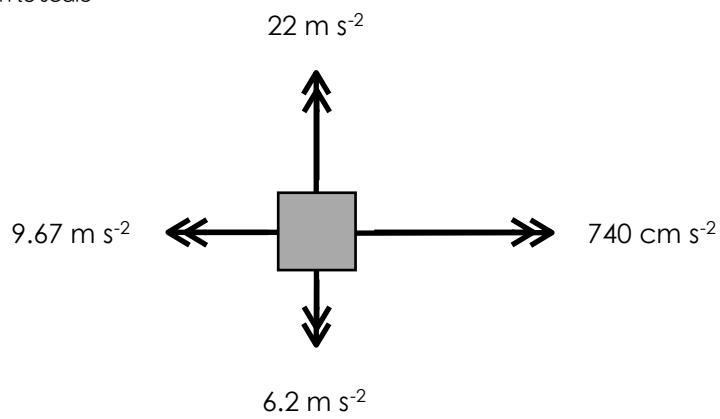
.....

.....

.....

4. Find the resultant acceleration of the body:

Diagram not drawn to scale



.....

.....

.....

.....

.....

.....

