

Statics & Dynamics

Fairlight Tuition

Five 1

[Mechanics]

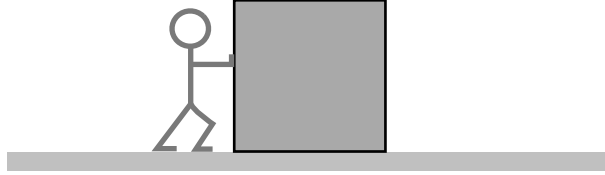
Name:

Date:


www.FairlightTuition.org

Easy

1. Draw and label the Push of the Man on the Box:

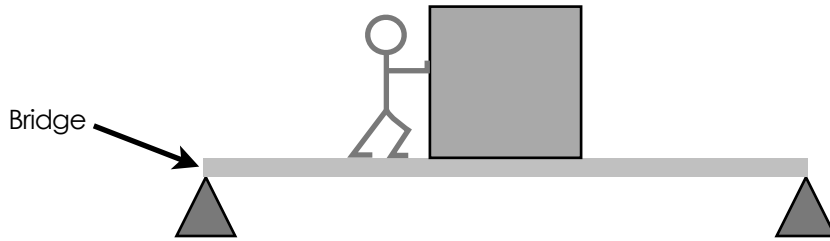


2. Draw and label the Push of the Earth on the Box and the Pull of the Earth on the Box:




Moderate

3. Draw and label the Push of the Bridge on the Man:



4. Draw and label the Push of the Man on the Bridge:



Hard

5. Draw and label all the forces acting on the Bridge:

